

# Add 3 or more fractions



1 Complete the additions.


Use the bar models to help you.

a)



$$\frac{1}{2} + \frac{1}{4} + \frac{1}{12} = \square$$

b)



$$\frac{1}{2} + \frac{1}{3} + \frac{1}{12} = \square$$

c)



$$\frac{2}{3} + \frac{1}{6} + \frac{1}{12} = \square$$

d)



$$\frac{1}{3} + \frac{1}{4} + \frac{1}{6} = \square$$

2 Complete the additions.

a)  $\frac{1}{5} + \frac{3}{10} + \frac{7}{20} = \square$

b)  $\frac{1}{16} + \frac{5}{32} + \frac{3}{8} = \square$

c)  $\frac{1}{4} + \frac{5}{24} + \frac{5}{12} = \square$

d)  $\frac{3}{16} + \frac{1}{2} + \frac{1}{4} = \square$

e)  $\frac{1}{2} + \frac{5}{18} + \frac{1}{9} = \square$

f)  $\frac{1}{5} + \frac{8}{35} + \frac{2}{7} = \square$

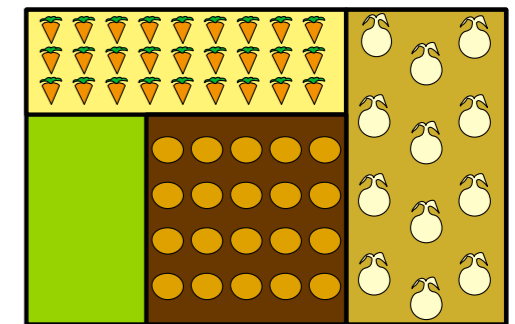
Explain how common multiples help when adding the fractions.

3 Rosie has a vegetable patch.

$\frac{2}{9}$  of the patch contains carrots.

$\frac{5}{18}$  of the patch contains potatoes.

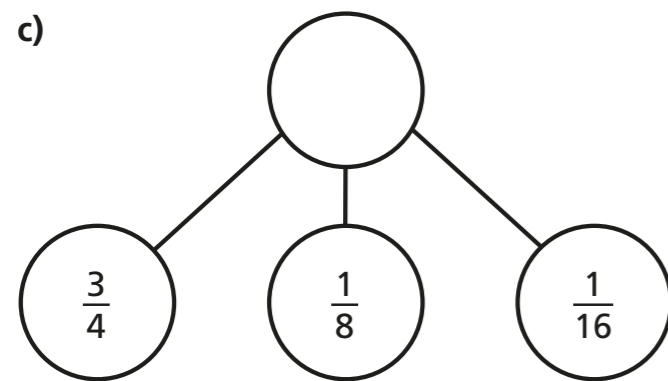
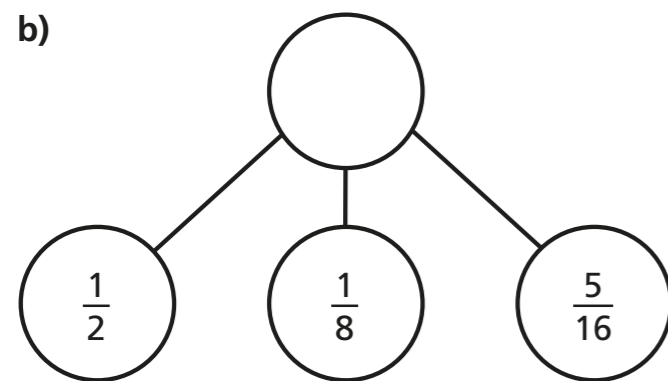
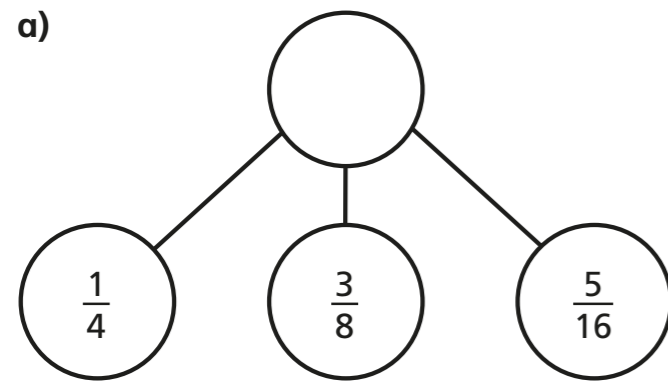
$\frac{1}{3}$  of the patch contains onions.



What fraction of the patch contains carrots, potatoes or onions?

$\square$  of the patch contains carrots, potatoes or onions.

4 Complete the part-whole models.



d) Which one of the part-whole models is the odd one out?

Is there more than one answer?

Explain how you know.

---



---



---

5 Fill in the missing numerators.

a)  $\frac{1}{8} + \frac{\square}{16} + \frac{3}{8} = \frac{5}{8}$

d)  $\frac{1}{8} + \frac{\square}{16} + \frac{1}{4} = \frac{3}{4}$

b)  $\frac{1}{8} + \frac{\square}{16} + \frac{3}{8} = \frac{7}{8}$

e)  $\frac{1}{8} + \frac{1}{16} + \frac{\square}{16} = \frac{3}{4}$

c)  $\frac{1}{4} + \frac{\square}{16} + \frac{3}{8} = \frac{3}{4}$

f)  $\frac{1}{4} + \frac{1}{16} + \frac{\square}{16} = \frac{3}{4}$

6 Complete the number square.

The total of each column is  $\frac{4}{5}$

The total of each row is  $\frac{4}{5}$

$\frac{3}{10}$	$\frac{2}{5}$	
	$\frac{1}{10}$	
$\frac{7}{20}$		

Create your own problem like this for a partner.
