



# Key Stage 2

# Mathematics

## Reasoning: Pack 1 Test 1a

Name	
Date	



35

total marks

Name:

Date:

## Key Stage 2 Maths Reasoning: Pack 1 Test 1a



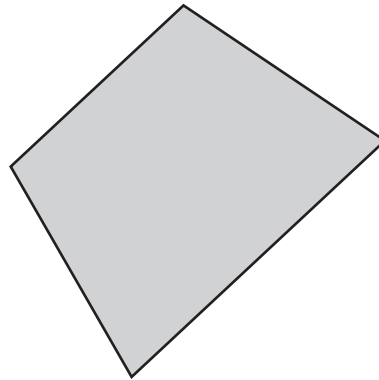
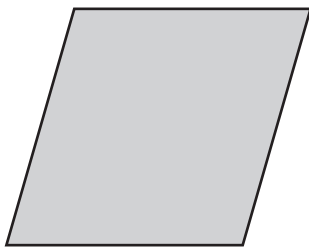
1. Order the following numbers from smallest to largest: 426, 412, 462, 416, 402

--	--	--	--	--

smallest largest



2. Draw all the lines of symmetry on these quadrilaterals.



3. Draw lines to match the following calculations to the correct answers.

$56 \times 0$

56

$56 \div 1$

0

$56 \times 1$




4. Write the decimal equivalents to match the following fractions.

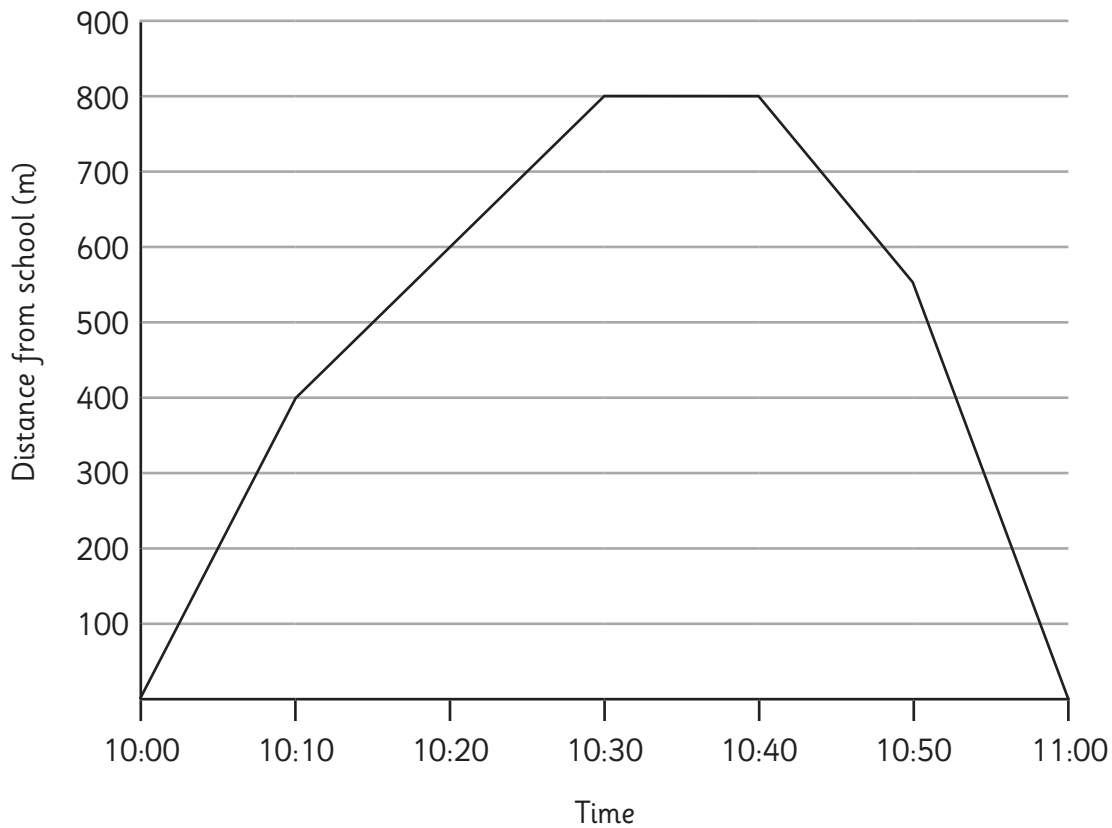
$\frac{1}{4} =$

$\frac{1}{2} =$

$\frac{3}{4} =$



5. Children in a class walk around their local area. The graph shows how far they had travelled from school during the visit.



a) How far were the children from their school at 10:20?

1 mark

b) For how long are the children at least 500m away from school?

1 mark

6.

a) Accurately measure these 2 lines.





1 mark

b) Write the difference in size between the 2 lines.

1 mark

Total for this page




---

10. James has to be home by 4:30pm. He is 35 minutes late. Write the time he arrives home in 24-hour time.



11. The number  $p$  is 20 more than the number  $q$ .

Using algebra, write the relationship between  $p$  and  $q$ .




12. Write all the factors of 24:



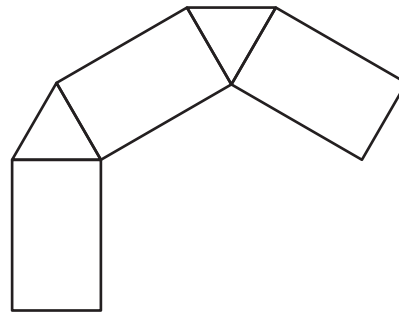
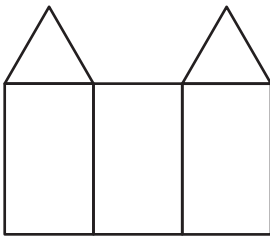
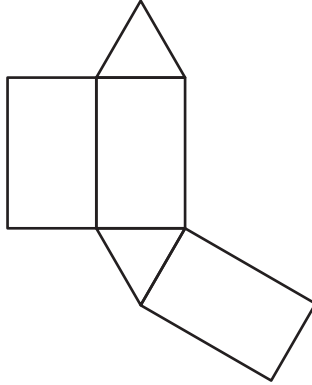
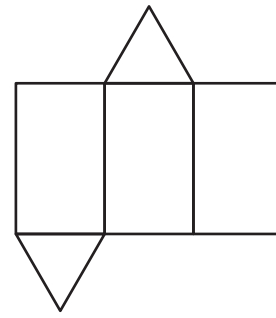
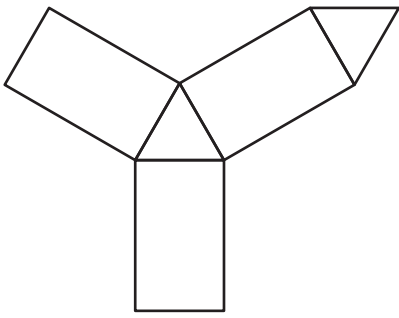
13. Use the following line to draw an angle of  $34^\circ$  at point A.

Use a ruler and a protractor or angle measurer.





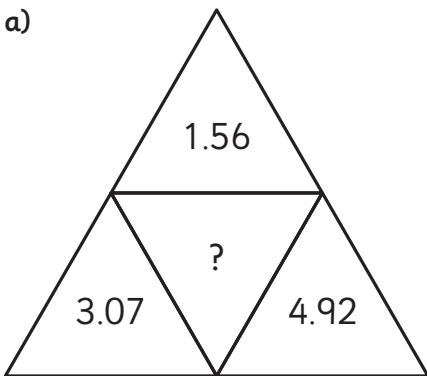
16. Circle the nets which will make a triangular prism.



2 marks

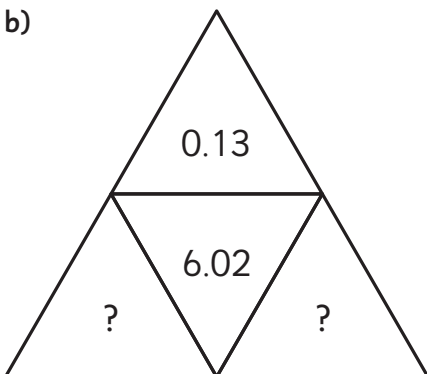
17. Complete the triangles so that the number in the centre is the sum of the numbers on the outside.

a)



1 mark

b)



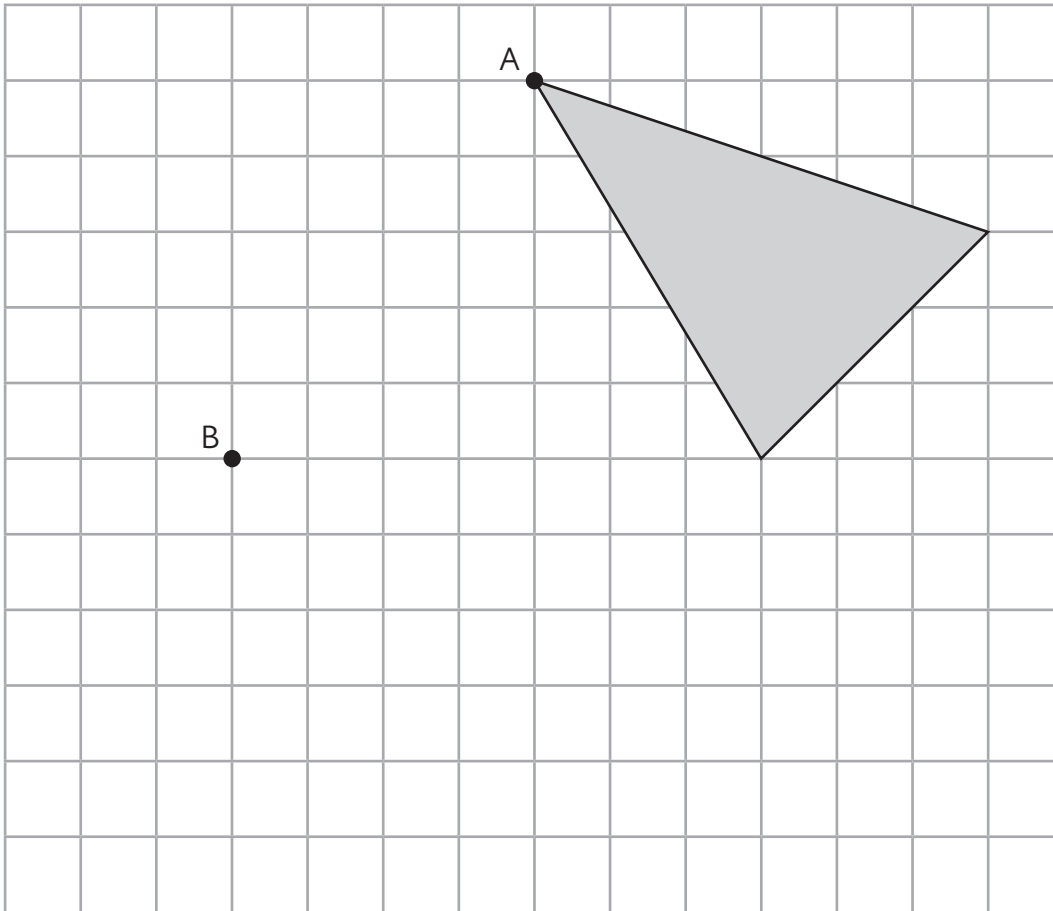
1 mark

Total for this page

18. Here is a shaded shape on a grid.

The shape is translated so that point A moves to point B.

Draw the shape in its new position.



2 marks

19. Round the number 347 500 to the nearest 1000, 10 000 and 100 000.

To the nearest 1000

To the nearest 10 000

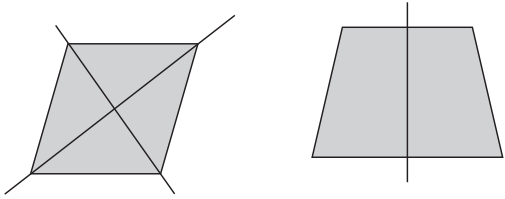
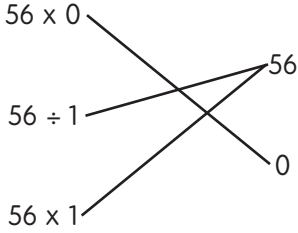
To the nearest 100 000

2 marks

Total for this page





question	answer	marks	notes
<b>1.</b>			
	402, 412, 416, 426, 462	1	
<b>2.</b>			
		2	
<b>3.</b>			
		1	1 mark for all correct.
<b>4.</b>			
	0.25 0.5 0.75	1	
<b>5.</b>			
a	600m	1	
b	Answers between 36 and 40 minutes inclusive.	1	
<b>6.</b>			
a	10.3 cm or 103 mm 4.6 cm or 46 mm	1	Allow 1mm error on each.
b	5.7cm or 57 mm	1	Allow correct calculation based on incorrect answers to 6a.
<b>7.</b>			
	0.024, 0.03, 0.036	1	Allow 0.030.

question	answer	marks	notes
<b>8.</b>			
	Any combination of coins to make 26p	2	2 marks for correct answer 1 mark for correctly calculating the change as 26p but incorrect coins. 1 mark for 1 error in calculation but gives answer using the least coins for that amount.
<b>9.</b>			
	$\begin{array}{r} 6012 \\ 3274 \\ \hline 2738 \end{array}$	2	1 mark per digit
<b>10.</b>			
	17:05	1	
<b>11.</b>			
	$p = q + 20$ or $q = p - 20$	2	1 mark for an incorrect expression that uses $p$ , $q$ , $20$ , $=$ and either $+$ or $-$ . e.g. $q = p + 20$
<b>12.</b>			
	1, 2, 3, 4, 6, 8, 12, 24	1	
<b>13.</b>			
	Allow $32^\circ - 36^\circ$ (See end of answers for an accurate answer of the angle)	2	
<b>14.</b>			
	3 balls	2	$(40 \text{ cm} \times 70 = 2800 \text{ cm} = 28 \text{ m})$ $3 \text{ balls} = 30 \text{ m}$ 1 mark for incorrect answer due to one error of calculation.
<b>15.</b>			
	0.85 and 0.15	2	2 marks for both numbers correct. 1 mark for correct method but 1 calculation mistake.

question	answer	marks	notes
<b>16.</b>			
		2	2 marks for 3 correct. 1 mark for 2 correct and none incorrect.
<b>17.</b>			
a	9.55	1	
b	2 numbers that add up to 5.89	1	
<b>18.</b>			
		2	2 marks for correct answer. 1 mark if triangle's corners are at B and one other correctly placed.
<b>19.</b>			
	348 000 350 000 300 000	2	2 marks for all correct. 1 mark for 2 correct.
<b>20.</b>			
	2, 3 and 15 or 1, 9 and 10	2	2 marks for a correct answer. 1 mark for a set of numbers that correctly meets 1 criteria.

---

question	answer	marks	notes
21.			
	2 bags	2	2 marks for correct answer. 1 mark for incorrect answer where it is calculated that $8 \frac{1}{3}$ times the recipe is required.
		Total 35	